





**INSTRUCTIONS FOR COMPLETING
"CHICKEN BASKET" WORKSHEETS**

- A** Using the "Chicken Basket" menu order board, find the price of each food item on the worksheet.
- B** Write the price of each food item on the worksheet on the blank line to the right of its picture.
- C** Do the math and write the answer by the \$ sign at the bottom of the problem.

Chicken Basket											
CHICKEN				SANDWICHES				PIZZAS			
 4-piece chicken dinner \$4.59	 3-piece chicken dinner \$3.59	 2-piece chicken dinner \$2.59	 1-piece chicken dinner \$1.59	 chicken sandwich \$1.99	 chicken sandwich \$1.99	 chicken sandwich \$1.99	 chicken sandwich \$1.99	 pizza \$5.99	 pizza \$5.99	 pizza \$5.99	 pizza \$5.99
FAMILY SIZE ORDERS											
DRINKS											
DESSERTS											

Name _____ Date _____

A Fill in the price of each food item. **B** Add the food prices together to find the total cost of the meal.

Chicken Basket	
<input type="checkbox"/> 4-Piece Thighs & Legs Dinner <input checked="" type="checkbox"/> 4-Piece Thighs & Legs Dinner	 \$ <u>4.59</u> B
Soft Drink <input checked="" type="checkbox"/> small <input type="checkbox"/> medium <input type="checkbox"/> large	 <u>.89</u> B
French Fries <input checked="" type="checkbox"/> small <input type="checkbox"/> large	 <u>1.00</u> B
Pudding <input type="checkbox"/> vanilla <input checked="" type="checkbox"/> chocolate	 + <u>.90</u> B
TOTAL	\$ <u>7.38</u> C