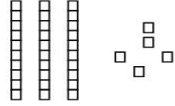
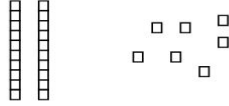
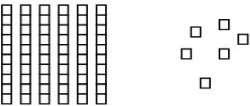
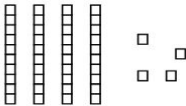
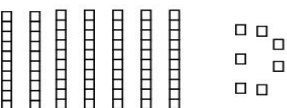
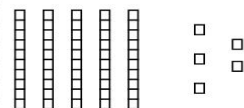


Name: \_\_\_\_\_

CCSS 2.NBT.1 Understand place value  
Primer, Prerequisite

## Place Value

**Directions:** Write how many tens and ones. Then write the number.

 ____ tens ____ ones ____ + ____ = ____	 ____ tens ____ ones ____ + ____ = ____
 ____ tens ____ ones ____ + ____ = ____	 ____ tens ____ ones ____ + ____ = ____
 ____ tens ____ ones ____ + ____ = ____	 ____ tens ____ ones ____ + ____ = ____