

Name: _____


Monday

Math Practice: Measuring Angles (4.MD.8)
In Whole Number Degrees

Using a protractor, measure the angles.




$\angle ABC =$ _____



$\angle DEF =$ _____




$\angle HGI =$ _____



$\angle KJL =$ _____



$\angle QPR =$ _____



$\angle STU =$ _____

Sketch each angle described using a protractor.

$\angle CDE = 45^\circ$

$\angle ABC = 115^\circ$