



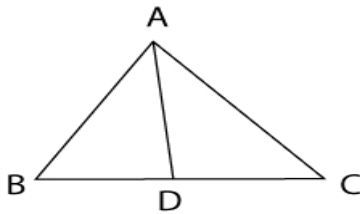
## 10th Grade Math Worksheet

Name \_\_\_\_\_

10th grade review.

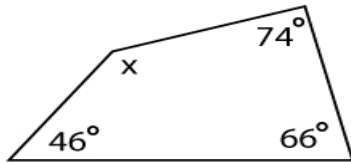
1. Each figure shows a triangle with one or more of its medians.

Find BC if DC = 5



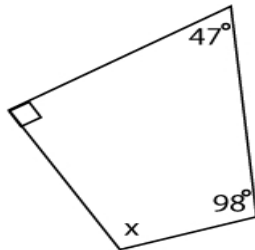
Answer: \_\_\_\_\_

2. Find the angle of x.



Answer: \_\_\_\_\_

- 3.



Answer: \_\_\_\_\_