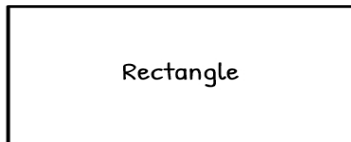


Name \_\_\_\_\_ Date \_\_\_\_\_

# QUADRILATERAL

Match the quadrilateral with its definition.



•

- There is only one pair of parallel sides.



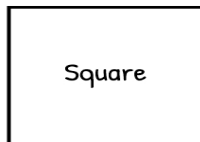
•

- All sides are the same length. There are four right angles.



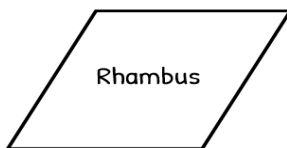
•

- There are two pairs of parallel sides. All sides are the same length.



•

- Opposite sides are parallel and the same length. There are four right angles.



•

- There are two pairs of opposite parallel sides.