

Write each missing number.

1



3



5

6

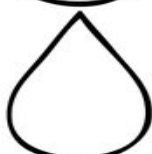


8



10

11




13




15

16



18




20

21




23




25

26



28



30