

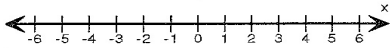
Name: \_\_\_\_\_

Score: \_\_\_\_\_

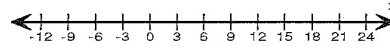
**One step Inequalities**

Solve each inequality and graph the solutions:

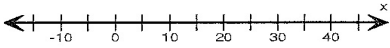
1)  $x + 7 \geq 4$



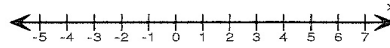
2)  $\frac{x}{3} < 5$



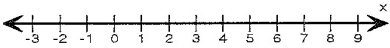
3)  $x - 9 > 11$



4)  $3x \leq 15$

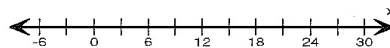


5)  $x - 1 < 6$

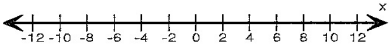


6)  $\frac{x}{2} \geq 9$

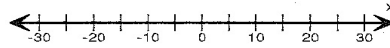
ae



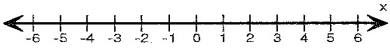
7)  $2x > 4$



8)  $x + 12 \leq 7$



9)  $x + 1 < 4$



10)  $x - 6 \leq 10$

