

Print

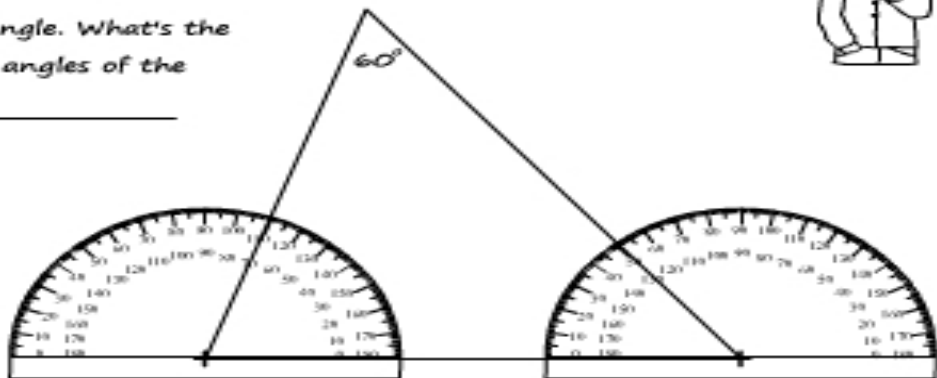
Name: _____

Measuring angles using a protractor

1) Measure each angle of the triangle.

I've done the first one for you.

2) Add each angle. What's the sum of all the angles of the triangle? _____



The sum of all angles of a triangle

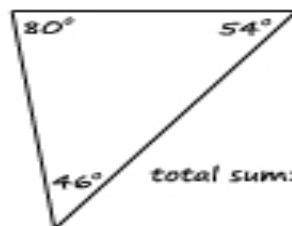
Calculate the total sum of all three angles in each triangle.

1)



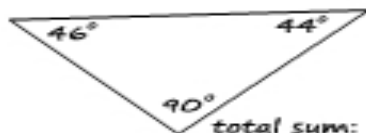
total sum: _____

2)



total sum: _____

3)



total sum: _____

4)



total sum: _____

Conclusion: The total sum of all angles of any triangle is _____