




Counting Coins



penny



nickel



dime





quarter

How much is a penny worth? _____

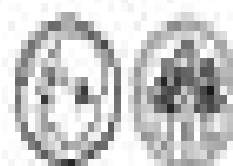
How much is a nickel worth? _____

How much is a dime worth? _____

How much is a quarter worth? _____



Counting Coins



Name _____