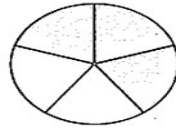


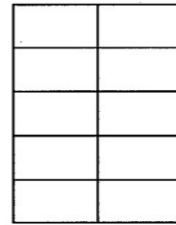
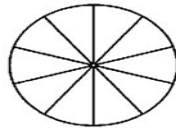
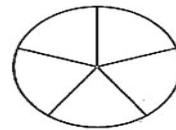


# Fractions of shapes



Shade  $\frac{3}{5}$  of each shape.



Shade  $\frac{4}{5}$  of each shape.

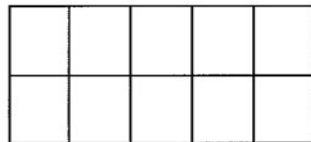


Shade the amount shown of each shape.

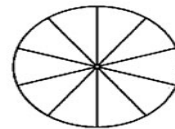
Two-fifths



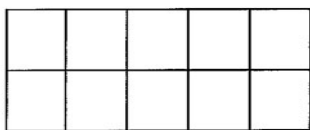
Four-fifths



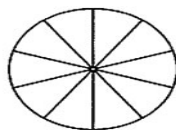
Three-tenths



Seven-tenths



Three-fifths



Nine-tenths

