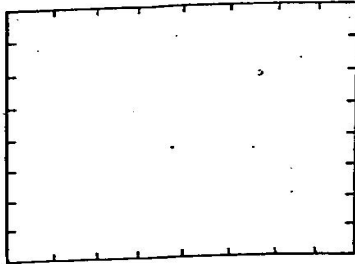


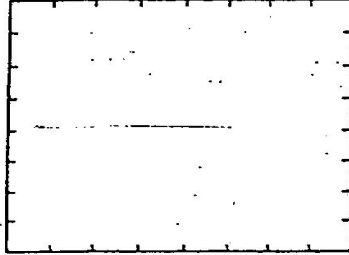
a. Please represent the problem graphically.
 Determine the product from the drawing and complete the sentence.




Fraction Action 83



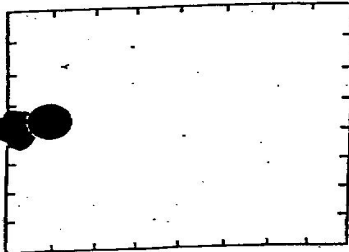
$$\frac{1}{2} \times \frac{1}{4} =$$




$$\frac{3}{4} \times \frac{3}{4} =$$



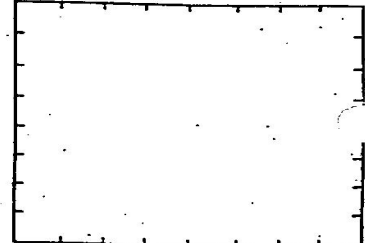
$$\frac{1}{2} \times \frac{3}{8} =$$



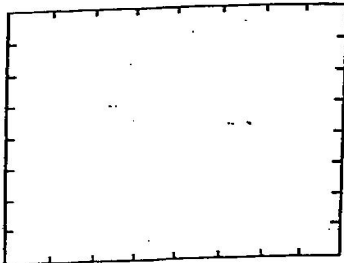
$$\frac{1}{4} \times \frac{3}{4} =$$




$$\frac{3}{4} \times \frac{1}{2} =$$



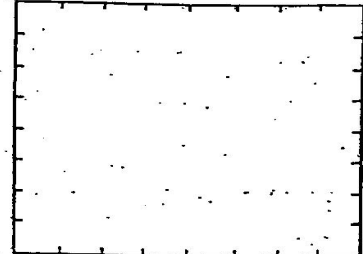
$$\frac{1}{4} \times \frac{1}{4} =$$



$$\frac{5}{8} \times \frac{1}{2} =$$



$$\frac{1}{8} \times \frac{3}{4} =$$



$$\frac{7}{8} \times \frac{3}{4} =$$