





## Habitats

Name: \_\_\_\_\_

Write these food chains in the correct order. Then write the name of one producer, one predator and one prey in each food chain.





1

\_\_\_\_\_ → \_\_\_\_\_ → \_\_\_\_\_

Producer: \_\_\_\_\_
Prey: \_\_\_\_\_
Predator: \_\_\_\_\_





2

\_\_\_\_\_ → \_\_\_\_\_ → \_\_\_\_\_

Producer: \_\_\_\_\_
Prey: \_\_\_\_\_
Predator: \_\_\_\_\_

3

\_\_\_\_\_ → \_\_\_\_\_ → \_\_\_\_\_

Producer: \_\_\_\_\_
Prey: \_\_\_\_\_
Predator: \_\_\_\_\_