


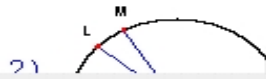

Name : _____

Score : _____

Teacher : _____


Date : _____

Solve the missing elements for each problem. Use 3.14 for Pi.




Angle A = 138°

8)




43°



Angle A = 85°

7)



Angle A = _____