











Add the coins and put the cents sign in.

1.  = \_\_\_\_\_  
\_\_\_\_\_
2.  = \_\_\_\_\_  
\_\_\_\_\_
3.  = \_\_\_\_\_  
\_\_\_\_\_
4.  = \_\_\_\_\_  
\_\_\_\_\_
5.  = \_\_\_\_\_  
\_\_\_\_\_
6.  = \_\_\_\_\_  
\_\_\_\_\_
7.  = \_\_\_\_\_  
\_\_\_\_\_
8.  = \_\_\_\_\_  
\_\_\_\_\_
9.  = \_\_\_\_\_  
\_\_\_\_\_
10.  = \_\_\_\_\_  
\_\_\_\_\_