



How many **groups** of 10 blocks are in each set?



ones



ones



ones


How many **groups** of 1 blocks are in each set?




ones




ones



ones




ones



ones

ones

total




ones

ones

total



ones



ones

total



ones