



### Multiplication Array


Use the grid to represent the problem shown by the array.



\_\_\_\_\_



\_\_\_\_\_



\_\_\_\_\_