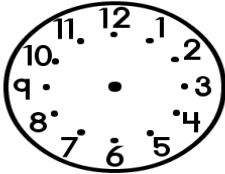


Name: _____

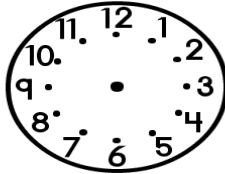
Telling Time to the Nearest Five Minutes

Draw the hands on the clock faces to show the correct times.
Be sure the minute hand is longer than the hour hand.

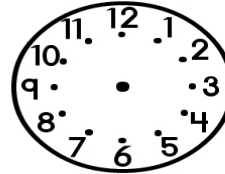
a. 4:15



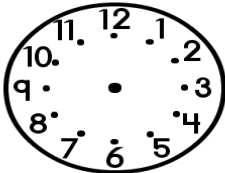
b. 12:35



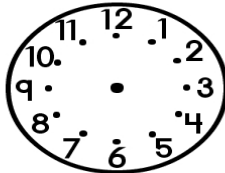
c. 8:10



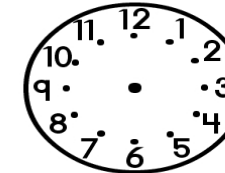
d. 1:55



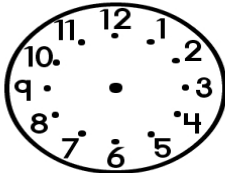
e. 9:05



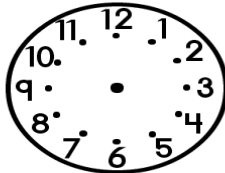
f. 7:20



g. 9:50



h. 8:40



i. 10:30

