

Name:





Date:

Learning intention: • Name and describe a pentagon.



How many sides?

How many corners?

	Name of shape	How many sides?	How many corners?
	pentagon		
			
			
			

What do you notice about the number of sides and the number of corners in these shapes? \_\_\_\_\_

	Name of shape	How many sides?	How many corners?
			

Does a circle have the same number of sides and corners? \_\_\_\_\_