



MAKE 10 NUMBERS


Drawing flowers on the frames below to make 10.



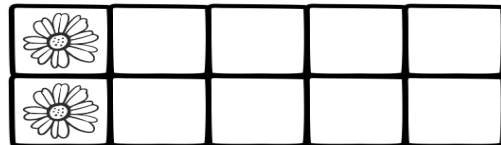
$$5 + \square = 10$$




$$8 + \square = 10$$




$$4 + \square = 10$$




$$2 + \square = 10$$




$$\square + 7 = 10$$



$$\square + 6 = 10$$



$$\square + 3 = 10$$



$$9 + \square = 10$$