

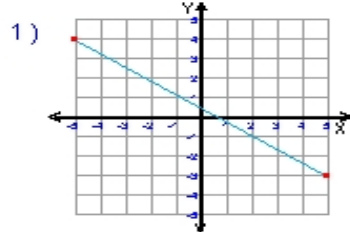
Name : \_\_\_\_\_

Score : \_\_\_\_\_

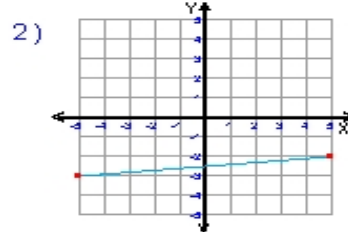
Teacher : \_\_\_\_\_

Date : \_\_\_\_\_

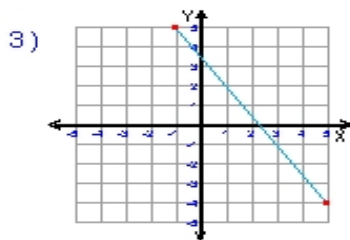
What is the slope of each line ?



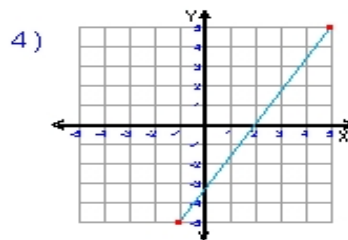
Slope = \_\_\_\_\_



Slope = \_\_\_\_\_



Slope = \_\_\_\_\_



Slope = \_\_\_\_\_

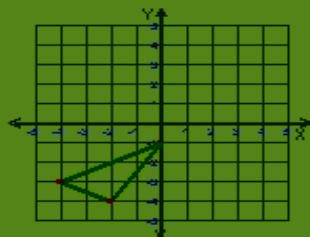
5)  $y = \frac{1}{2}x - 3$

Slope = \_\_\_\_\_

6)  $y = 2x + 1$

Slope = \_\_\_\_\_

6) Translation: 3 right and 4 up



5) Translation: 4 left and 5 down

