

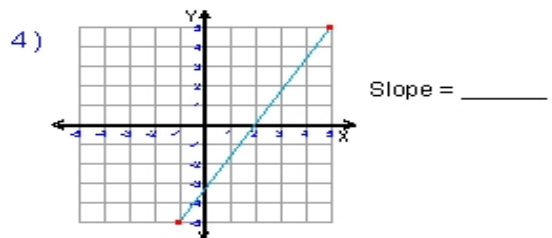
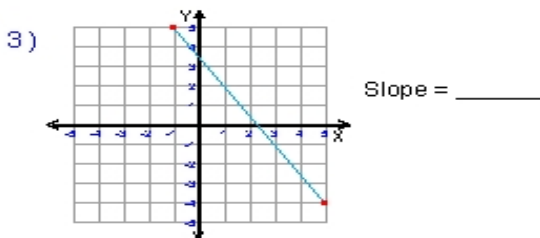
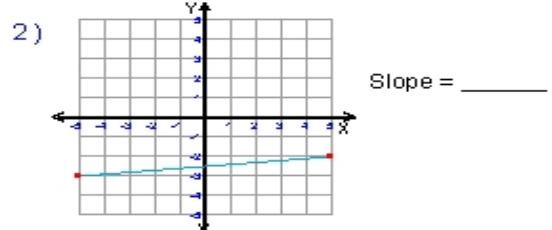
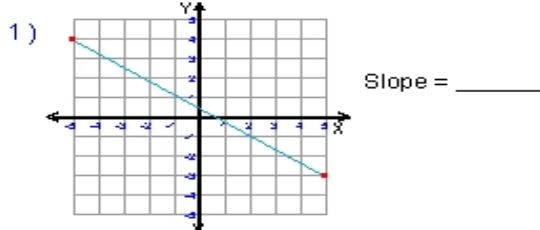
Name : _____

Score : _____

Teacher : _____

Date : _____

What is the slope of each line ?



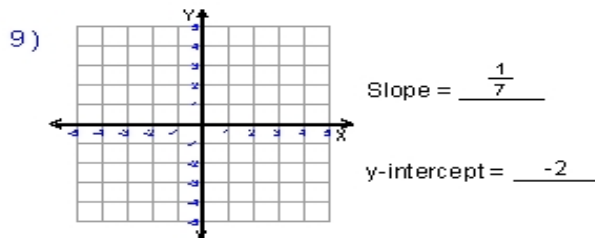
5) $y = \frac{1}{2}x - 3$ Slope = _____

6) $y = -\frac{2}{7}x + 1$ Slope = _____

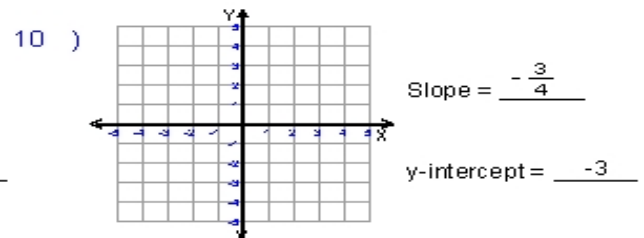
7) $y = 10x + 2$ Slope = _____

8) $y = -3x$ Slope = _____

Write the slope-intercept form and plot the equation of each line given the slope and y-intercept.



Equation : _____



Equation : _____