

Name: _____

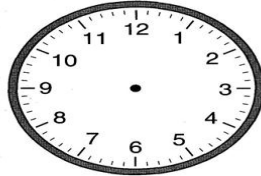
CCSS 2.MD.7 Tell and write time from analog and digital clocks to the nearest....

Telling Time to Five Minutes

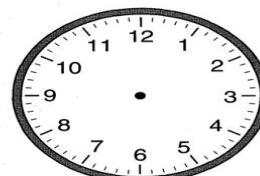
Directions: Draw in the minute and hour hands to match the digital time.



4:00




4:05




4:10



4:15



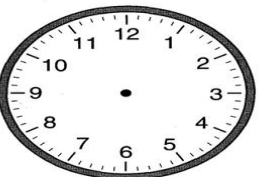
4:20




4:25



4:30




4:35




4:40



4:45



4:50



4:55