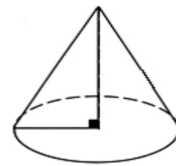


Pyramids, Cones and Spheres Worksheet

A pyramid or cone has:

Notice: The following Pythagorean Theorem can be applied:

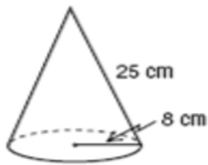
$$(\quad)^2 + (\quad)^2 = (\quad)^2$$



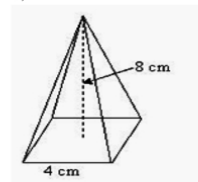
Volume of a pyramid (or cone): $V = \frac{1}{3} \pi r^2 h$

1. Calculate the volume of the following solids:

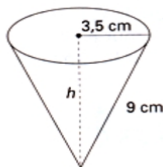
a)



b)



c)



d)

