

Name : \_\_\_\_\_

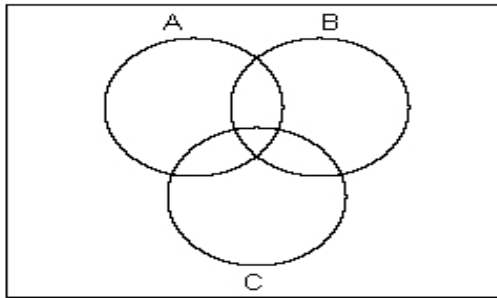
Score : \_\_\_\_\_

Teacher : \_\_\_\_\_

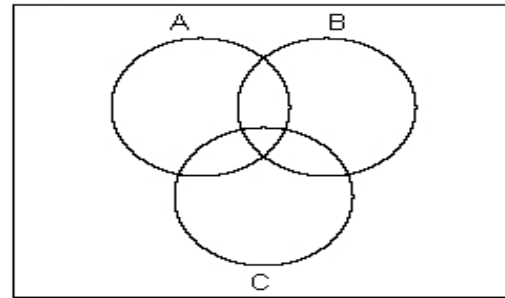
Date : \_\_\_\_\_

**Shade the Venn Diagrams**

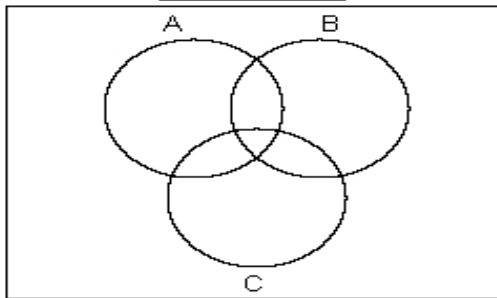
1) Shade  $(A \cap C)' \cup B$



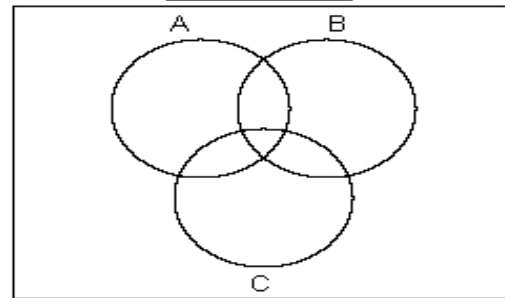
2) Shade  $(B \cup C)' \cup A$



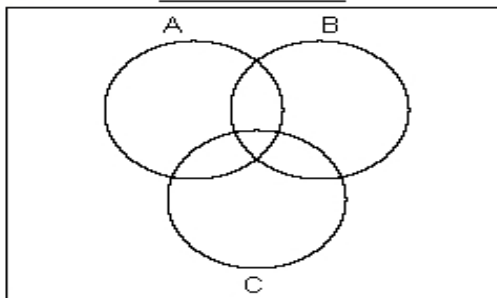
3) Shade  $(A \cup B) - C$



4) Shade  $A \cup (B - C)$



5) Shade  $C' \cap (B - A)$



6) Shade  $B' \cap (A - C)$

