



Using Science Skills: Interpreting Diagrams

Use the figures below to answer the following questions.

a. _____



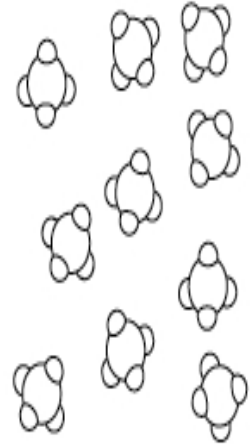
b. _____



c. _____



d. _____



26. Label each figure as a pure substance or a mixture.

27. Is an element or a compound represented in figure d above? Explain your answer.
