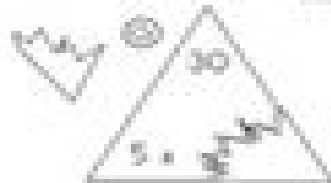
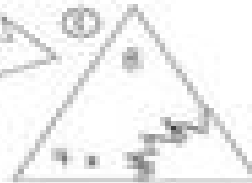






Broken Glass

Multiplying 2, 4, and 5



Oh my, the cat glass triangles the king ordered for the stained glass window arrived in broken pieces. Help the king get things organized before the queen arrives and sees his mess. Look at the product on each piece to find the missing fact. This will help get the broken window pieces back together.



Cut out large $4\frac{1}{2} \times 4\frac{1}{2} \times 4\frac{1}{2}$ triangles from the same color construction paper. Write a multiplication problem on the triangle. Place the multiplier, the multiplicand, and the product in each of the points of the triangle. Use the triangles on this page to guide your work. Tear off the corners that hold either the multiplicand or multiplier. Place the triangles in one pile and the torn pieces in another pile. Ask your young learner to match the correct torn piece to the correct triangle to make a multiplication sentence. Have fun using these triangle "Rednecks"!