



Name _____

Date _____

Title _____









Page _____



Phases of the Moon Test



Use your white crayon to color the phases listed each box.

							
new moon	waxing crescent	first quarter	waxing gibbous	full moon	waning gibbous	last quarter	waning crescent

Answer the questions in complete sentences.

What is the moon made of? _____

Why does the moon look bright in the night sky? _____

Is the moon a star, a planet, or a satellite? _____

How long does it take the moon to go through its entire set of phases? _____

The moon is covered with _____ and _____.

What is a blue moon? _____

Extra question: How often does a blue moon happen? _____