

Practice D



Find the number of degrees in each unmarked angle.

Remember: The total number of degrees of the interior angles in a triangle equals 180.

1.




$\angle n =$ _____

2.




$\angle n =$ _____

3.




$\angle n =$ _____

4.



$\angle n =$ _____

5.



$\angle n =$ _____

6.



$\angle n =$ _____

7.



$\angle n =$ _____

8.



$\angle n =$ _____