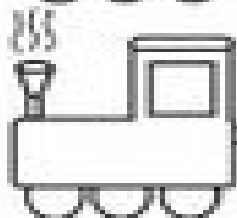


Name _____ Date _____


Write each missing number.




1		3		5		7			10
---	--	---	--	---	--	---	--	--	----



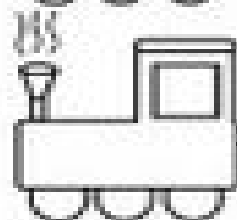
11		13		15		17			20
----	--	----	--	----	--	----	--	--	----



21		23		25		27			30
----	--	----	--	----	--	----	--	--	----



31		33		35		37			40
----	--	----	--	----	--	----	--	--	----



41		43		45		47			50
----	--	----	--	----	--	----	--	--	----