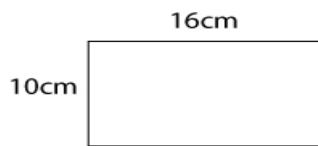




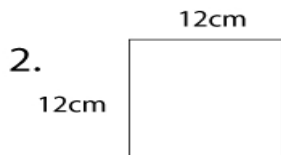
Geometry Worksheet

Name _____

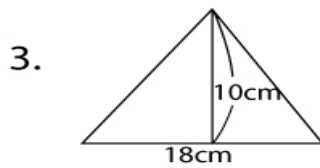
1. Find the area.



Answer: _____

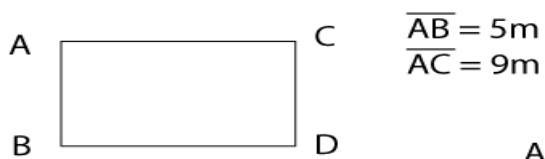


Answer: _____



Answer: _____

4. Find the perimeter.



Answer: _____