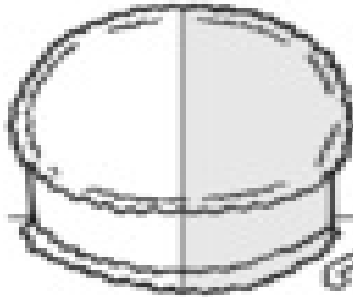


Name _____

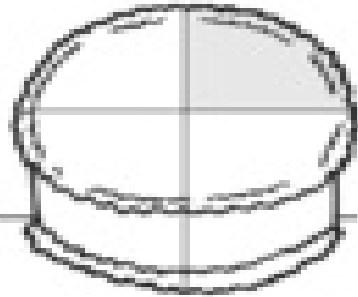
One-half and one-fourth

Chocolate Cake Fractions

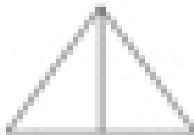
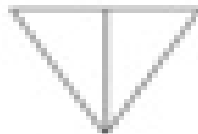

One-half is shaded.



One-fourth is shaded.



Color $\frac{1}{2}$ of each.



Color $\frac{1}{4}$ of each.

