


Name \_\_\_\_\_


## Decimals and Fractions

Identify decimal model amounts and write equivalent fractions.


Write the decimal and equivalent fraction represented by the model.




1. 0.80  $\frac{80}{100}$




2. \_\_\_\_\_




3. \_\_\_\_\_



4. \_\_\_\_\_



5. \_\_\_\_\_



6. \_\_\_\_\_