




What time is it?



Please look at each clock  
and write the time on the line.

Name \_\_\_\_\_

Date \_\_\_\_\_



# Telling Time Worksheets Layout A





\_\_\_\_\_

\_\_\_\_\_

\_\_\_\_\_

\_\_\_\_\_



\_\_\_\_\_

\_\_\_\_\_

\_\_\_\_\_

\_\_\_\_\_

0...5...10...15...20...25...30...35...40...45...50...55...