

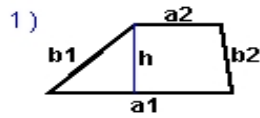
Name : _____

Score : _____

Teacher : _____

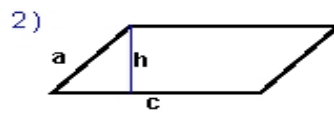
Date : _____

Identify and Calculate the Area and Perimeter for each Quadrilateral.



$a_1 = 8.7 \text{ ft}$ $a_2 = 4.1 \text{ ft}$
 $b_1 = 5.86 \text{ ft}$ $b_2 = 4.23 \text{ ft}$
 $h = 4.2 \text{ ft}$

Area: _____
Perimeter: _____
Type: _____



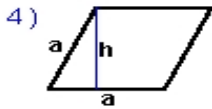
$a = 4.38 \text{ yds}$
 $c = 9.9 \text{ yds}$ $h = 4.1 \text{ yds}$

Area: _____
Perimeter: _____
Type: _____



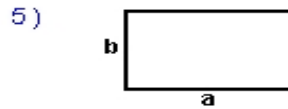
$s = 6.8 \text{ mm}$

Area: _____
Perimeter: _____
Type: _____



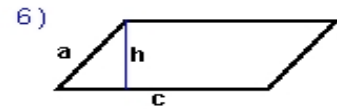
$a = 5.5 \text{ inches}$ $h = 5.02 \text{ inches}$

Area: _____
Perimeter: _____
Type: _____



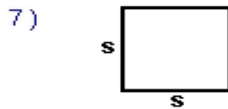
$a = 7.9 \text{ inches}$ $b = 4.8 \text{ inches}$

Area: _____
Perimeter: _____
Type: _____



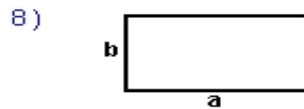
$a = 4.42 \text{ ft}$
 $c = 10 \text{ ft}$ $h = 4.2 \text{ ft}$

Area: _____
Perimeter: _____
Type: _____



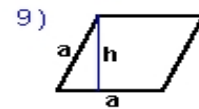
$s = 5.1 \text{ yds}$

Area: _____
Perimeter: _____
Type: _____



$a = 8.7 \text{ cm}$ $b = 4.6 \text{ cm}$

Area: _____
Perimeter: _____
Type: _____



$a = 5 \text{ mm}$ $h = 4.6 \text{ mm}$

Area: _____
Perimeter: _____
Type: _____