

Date

T: identify angles as being right angles or bigger / smaller than a right angle

For each angle you need to say: a) if it is a right angle, or bigger / smaller than a right angle
b) if it is an acute, right or obtuse angle

Example: 1a) Smaller than a right angle
1b) Acute

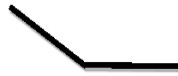
1)



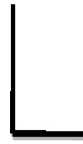
2)



3)



4)



5)



6)



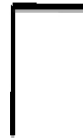
7)



8)



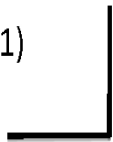
9)



10)



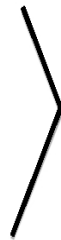
11)



12)



13)



14)



15)

