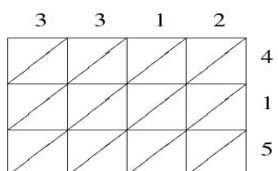
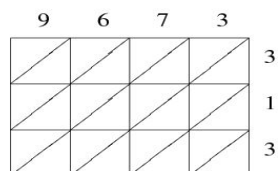


## Lattice Multiplication (A)

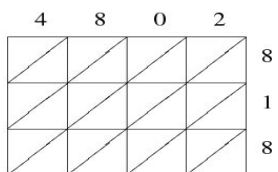
Use lattice multiplication to find each product.



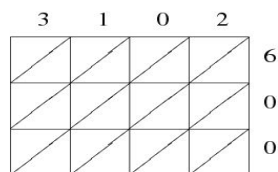
$3312 \times 415 = \underline{\hspace{2cm}}$



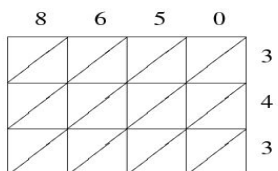
$9673 \times 313 = \underline{\hspace{2cm}}$



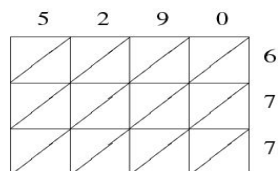
$4802 \times 818 = \underline{\hspace{2cm}}$



$3102 \times 600 = \underline{\hspace{2cm}}$



$8650 \times 343 = \underline{\hspace{2cm}}$



$5290 \times 677 = \underline{\hspace{2cm}}$