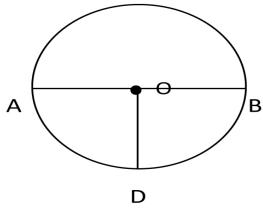


Student Name: \_\_\_\_\_

Score: \_\_\_\_\_

**Basic Circle Worksheet**

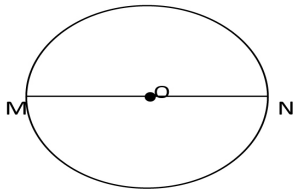
Identify center, radius and diameter of the given circles:



OD = \_\_\_\_\_

AB = \_\_\_\_\_

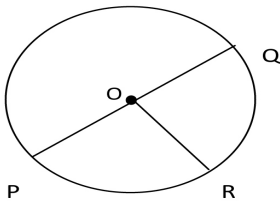
O = \_\_\_\_\_



Center = \_\_\_\_\_

Radius = \_\_\_\_\_ or \_\_\_\_\_

Diameter = \_\_\_\_\_



Center = \_\_\_\_\_

Radius = \_\_\_\_\_ or \_\_\_\_\_ or \_\_\_\_\_

Diameter = \_\_\_\_\_