

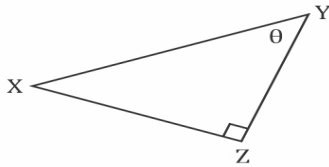
Name

Date

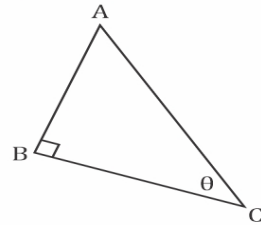
TRIGONOMETRIC RATIOS

Find each trigonometric ratio using segments.

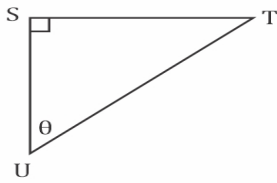
$\tan \theta$



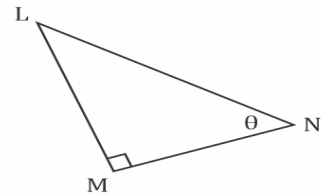
$\sin \theta$



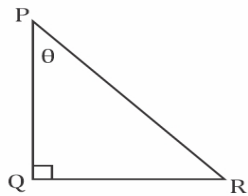
$\cos \theta$



$\tan \theta$



$\sin \theta$



$\cos \theta$

