




Name: _____


Can you tell the time to the nearest 5 minutes?
Worksheet 2

1.



1:55

2.




1:58

3.



2:35

4.




5.




5:37

6.




6.



6:00

8.




6:35

10.



11.



6:12

12.

