




Name: _____


Can you tell the time to the nearest 5 minutes?
Worksheet 2

1



1:55

2




1:58

3



2:35

4




5



5:05

6




6:00


7



8



9



5:55

10



11



5:12

12

