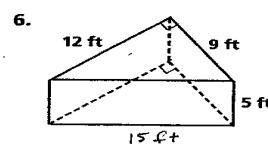
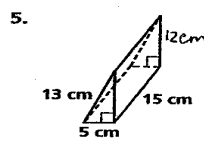
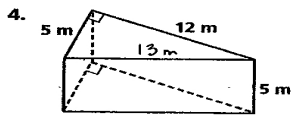
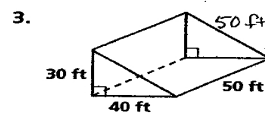
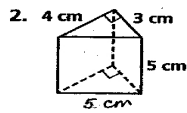
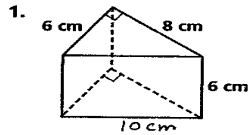


## Practice 6-2

### Example Exercises

#### Example 1

Find (a) the lateral area and (b) the surface area of each prism.



#### Example 2

Find the lateral area of each cylinder to the nearest tenth.

