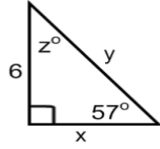
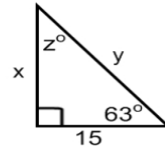


Find the value of each variable to solve the right triangle.

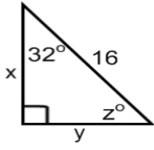
1. $x =$ _____
 $y =$ _____
 $z =$ _____



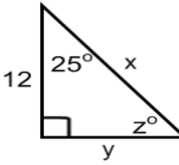
2. $x =$ _____
 $y =$ _____
 $z =$ _____



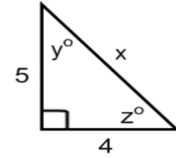
3. $x =$ _____
 $y =$ _____
 $z =$ _____



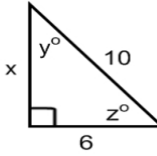
4. $x =$ _____
 $y =$ _____
 $z =$ _____



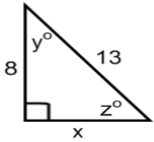
5. $x =$ _____
 $y =$ _____
 $z =$ _____



6. $x =$ _____
 $y =$ _____
 $z =$ _____



7. $x =$ _____
 $y =$ _____
 $z =$ _____



8. $x =$ _____
 $y =$ _____
 $z =$ _____

