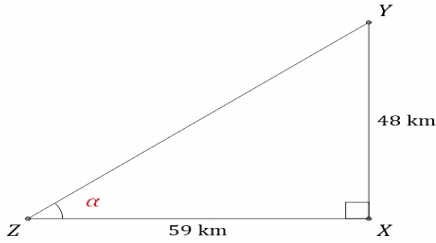


Name \_\_\_\_\_

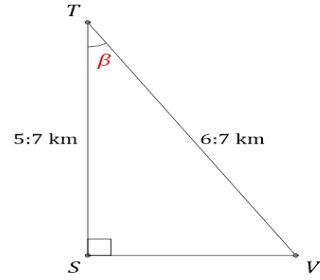
Date \_\_\_\_\_

# TRIGONOMETRIC RATIOS

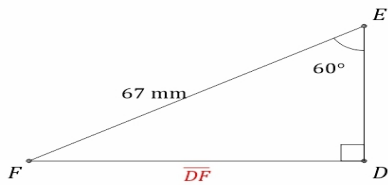
Calculate the angle and side values using trigonometric ratios.



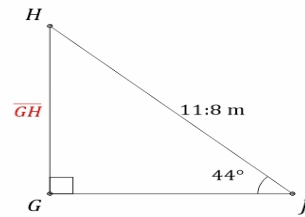
$\alpha = \angle XZY =$  \_\_\_\_\_



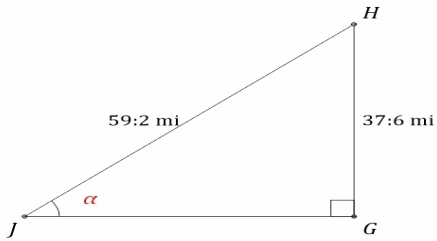
$\beta = \angle STV =$  \_\_\_\_\_



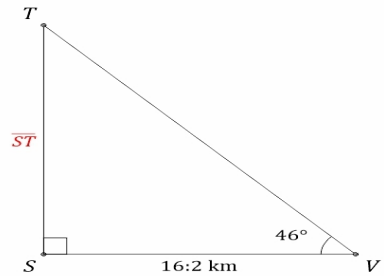
$\overline{DF} =$  \_\_\_\_\_



$\overline{GH} =$  \_\_\_\_\_



$\alpha = \angle GJH =$  \_\_\_\_\_



$\overline{ST} =$  \_\_\_\_\_