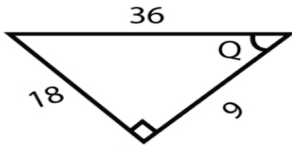


Name

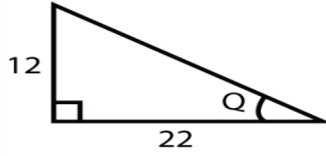
Date

# RIGHT TRIANGLE TRIGONOMETRY

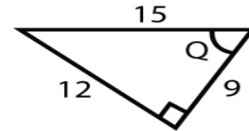
Find the value of the trigonometric function indicated.



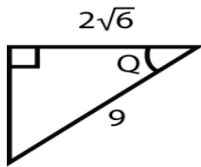
$\tan Q =$



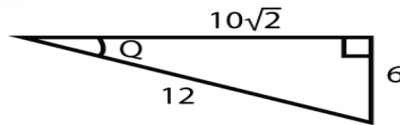
$\tan Q =$



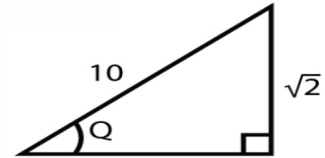
$\tan Q =$



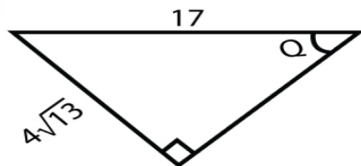
$\sec Q =$



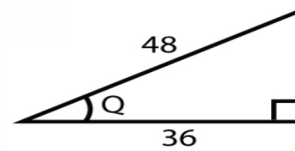
$\operatorname{cosec} Q =$



$\operatorname{cosec} Q =$



$\sin Q =$



$\cos Q =$