

Name : _____

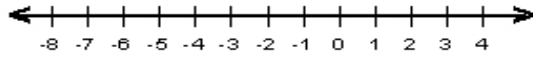
Score : _____

Teacher : _____

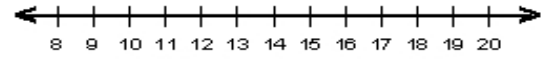
Date : _____

Solve and Graph the Inequalities

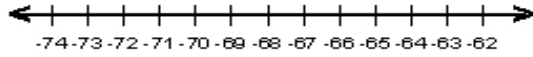
1) $24 \geq -4p$



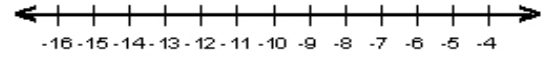
6) $10 > -5 + b$



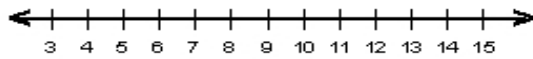
2) $-13 \geq \frac{q}{5}$



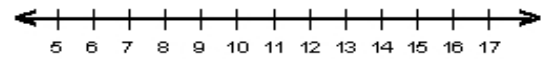
7) $-7 < \frac{c}{2}$



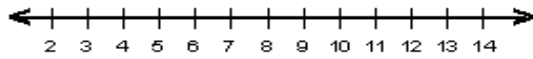
3) $-63 \leq -7s$



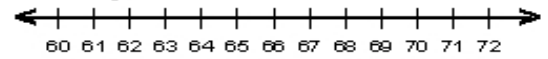
8) $7 < v - 6$



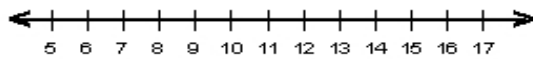
4) $13 \leq q + 4$



9) $\frac{x}{5} > 13$



5) $-4 + a \geq 9$



10) $\frac{w}{4} > 13$

