
















Name : _____ Score : _____

Teacher : _____ Date : _____

Measuring Line Segments

How many Inches ?

- | | | |
|-----|--------------------------------------------------------------------------------------|-------|
| 1) |  | _____ |
| 2) |  | _____ |
| 3) |  | _____ |
| 4) |  | _____ |
| 5) |  | _____ |
| 6) |  | _____ |
| 7) |  | _____ |
| 8) |  | _____ |
| 9) |  | _____ |
| 10) |  | _____ |
| 11) |  | _____ |
| 12) |  | _____ |
| 13) |  | _____ |
| 14) |  | _____ |
| 15) |  | _____ |