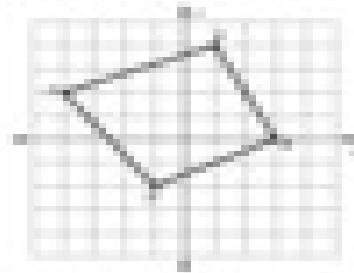



**Instructions:**

Graph the image of the figure using the transformation given.


1) rotate  $180^\circ$  about the origin




2) rotate  $180^\circ$  about the origin




3) rotate  $90^\circ$  counterclockwise about the origin



4) rotate  $90^\circ$  clockwise about the origin



5) rotate  $90^\circ$  clockwise about the origin



6) rotate  $180^\circ$  about the origin

