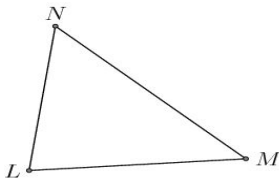


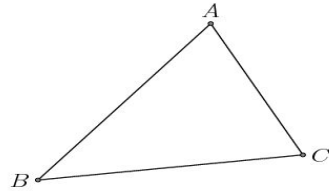
Triangle Centers (G)

Find each given triangle center

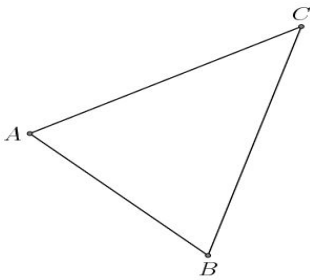
1. - orthocenter



2. - orthocenter



3. - orthocenter



4. - orthocenter

