


Fractions of shapes




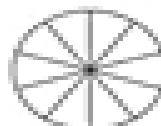
Shade $\frac{1}{3}$ of each shape.



Shade $\frac{2}{5}$ of each shape.



Shade $\frac{3}{10}$ of each shape.




Shade the fraction of each shape.

$\frac{4}{10}$



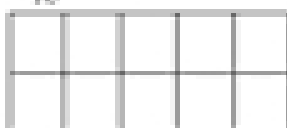
$\frac{6}{10}$



$\frac{3}{10}$



$\frac{1}{10}$



$\frac{6}{10}$



$\frac{9}{10}$

