

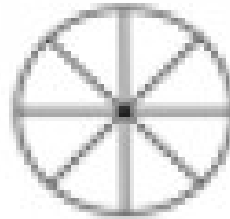
Directions: Identify the shapes that are split into equal parts.

1.




equal  
not equal

6.



equal  
not equal

2.



equal  
not equal

7.




equal  
not equal

3.



equal  
not equal

8.




equal  
not equal

4.




equal  
not equal

9.




equal  
not equal

5.



equal  
not equal

10.



equal  
not equal